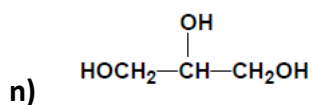
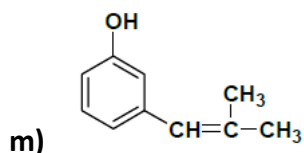
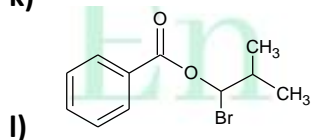
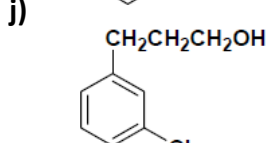
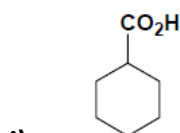
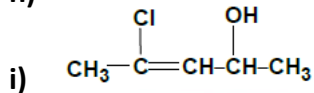
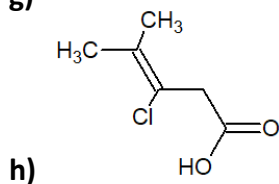
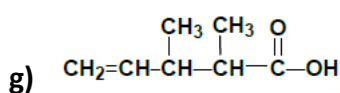
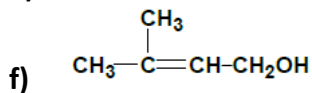
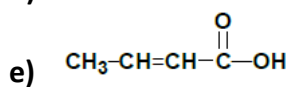
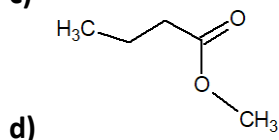
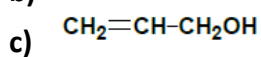
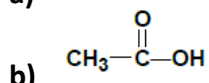
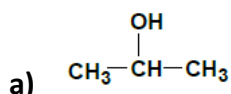




Sin Dudas
En Química

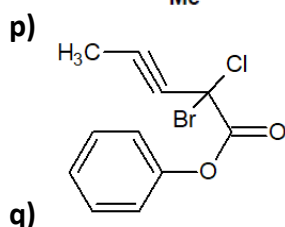
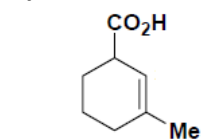
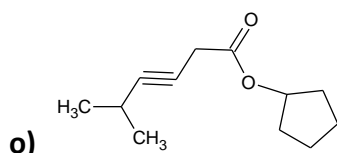
Ejercicios de formulación orgánica: alcoholes, ácidos carboxílicos y ésteres.

1. Nombra los siguientes compuestos:



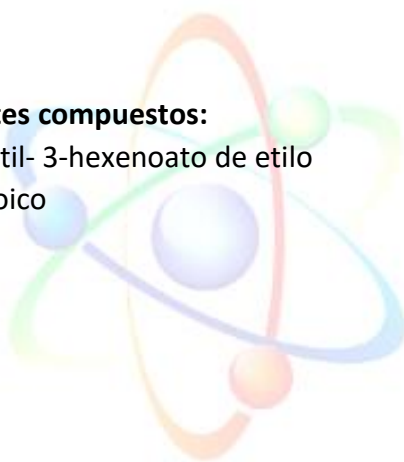


Sin Dudas
En Química



2. **Formula los siguientes compuestos:**

- a) 3-Cloro-5-fenil-5-metil- 3-hexenoato de etilo
- b) Ácido 3-fenilpropenoico
- c) 4-Fenil-2-buten-1-ol



Sin Dudas

En Química